

Chapter

01

Basic Mathematics



TOPIC WISE QUESTIONS



TRIGONOMETRY

Q.1 Change radian into degree –

- (i) $\pi/4$ (ii) $5\pi/6$ (iii) $7\pi/2$ (iv) $3\pi/5$
 (v) $2\pi/3$ (vi) $3\pi/4$

Q.2 Change degree into radian –

- (i) 160° (ii) 135° (iii) 75° (iv) 65°
 (v) 225° (vi) 250° (vii) 310°

Q.3 Find the value of following

- (i) $\sin 15^\circ$ (ii) $\cos 15^\circ$
 (iii) $\tan 15^\circ$ (iv) $\sin 53^\circ$
 (v) $\cos 53^\circ$ (vi) $\tan 37^\circ$
 (vii) $\tan 53^\circ$ (viii) $\sin 53^\circ - \cos 37^\circ$

Q.4 Calculate the value of following :-

- (i) $\frac{\sin 135^\circ}{\cos 120^\circ}$ (ii) $\frac{\sin 120^\circ}{\cos 150^\circ}$
 (iii) $\sin 105^\circ$ (iv) $\sin 300^\circ$
 (v) $\cos 240^\circ$ (vi) $\sin^2(20^\circ) + \sin^2(70^\circ)$
 (vii) $\sin 225^\circ$ (viii) $\sin 315^\circ$
 (ix) $\cos 270^\circ$

Q.5 Calculate the value of following :-

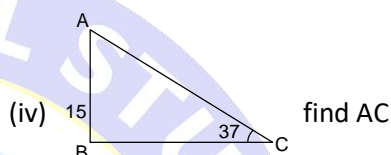
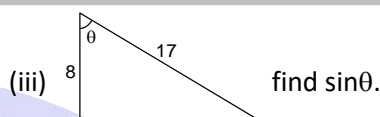
- (i) $2 \sin 15^\circ \cos 15^\circ$ (ii) $\sin 22.5^\circ \cos 22.5^\circ$
 (iii) $\tan 75^\circ$ (iv) $\sin^2 22.5^\circ$

Q.6 Calculate the value of following :-

- (i) $\sin\left(\frac{3\pi}{4}\right)$ (ii) $\tan\left(\frac{7\pi}{6}\right)$
 (iii) $\cos\left(\frac{5\pi}{4}\right)$ (iv) $\sin\left(\frac{2\pi}{3}\right)$

Q.7 Calculate the value of following :-

- (i) If $\tan \theta = \frac{5}{12}$; find $\sin \theta$
 (ii) If $4 \sin^2 \theta = 1$ find θ . {where $\theta (0, \pi)$ }



APPROXIMATIONS

Q.8 Use the approximation $(1+x)^n \approx 1+nx$, $|x| \ll 1$, to find approximate value for $\sqrt{99}$
 (1) 9.05 (2) 9.95
 (3) 8.85 (4) 7.91

Q.9 Find approximate value for $\frac{1}{1.01}$
 (1) 0.99 (2) 1.02 (3) 0.90 (4) 1.99

Q.10 Use the small angle approximations to find approximate values for $\tan 4^\circ$.
 (1) 0.05 (2) 0.26 (3) 0.07 (4) 0.69

DIFFERENTIATION

Q.11 Find the derivative of given functions w.r.t. corresponding independent variable.

- (i) $y = x^3$ (ii) $y = \frac{1}{x^2}$
 (iii) $y = x^2 + x + 8$ (iv) $y = 2 \tan x$
 (v) $y = 5 \sin x$ (vi) $y = x^2 + \sin x$
 (vii) $y = \tan x + \cot x$ (viii) Example $\sin x$
 (ix) $x \sin x$ (x) $y = e^x \ln x$
 (xi) $y = e^x \tan x$
 (xii) $y = (x^2 + 3x + 2) \cdot (2x^4 - 5)$
 (xiii) $y = \sin x \cos x$ (xiv) $s = (t^2 + 1)(t^2 - 1)$

Q.12 Find derivative of given functions w.r.t. x

(i) $y = \frac{\sin x}{\cos x}$

(ii) $y = \frac{x^2 + 1}{x}$

(iii) $y = \frac{\sin x}{x^2}$

(iv) $y = \frac{x^2}{2x + 1}$

(v) $y = \frac{\cos x}{x}$

(vi) $y = \sin 2x$

(vii) $y = \sin^2 x$

(viii) $y = \sin 5x$

(ix) $y = 2 \sin(ax + b)$ where a and b constants

(x) $y = (2x + 1)^5$

(xi) $y = (4 - 3x)^9$

(xii) $y = \sin^2(3 - 4x)$

(xiii) $y = \sqrt{4x^2 + 2}$

(xiv) $y = \sqrt{2x + 5}$

(xv) $y = \frac{1}{\sqrt{6x^2 + 2x + 3}}$

(xvi) $y = \frac{1}{\sqrt{7x - 2}}$

(xvii) $x = 2y^2 + 2$

(xviii) $x = 4 \sin y + 6$

(xix) $x = 4 \ln y + 6$

Q.13 Find the first derivative & second derivative of given functions w.r.t. corresponding independent variable.

(i) $y = \sin x$

(ii) $r = 2\theta^2$

(iii) $y = \ln x$

(iv) $y = 6x^2 - 10x - 5x^{-2}$

(v) $r = \frac{12}{\theta} - \frac{4}{\theta^3} + \frac{1}{\theta^4}$

(vi) $y = \sin x + \cos x$

(vii) $y = \ln x + e^x$

Q.14 What is $\frac{dy}{dx}$ when $x = 0$

(i) $y = 6x^2 - 4x + 3$

(ii) $y = 3x^2 + 2x - 5$

(iii) $y^2 + x^2 = 16$

(iv) $x = 4y^2 - 16$

Q.15 Find out $f'(x)$ when $f''(x) = 0$

(i) $f(x) = 3x^3 - 18x^2 + 2x + 4$

(ii) $f(x) = x^3 - 3x^2 + 2x + 1$

(iii) $f(x) = \sqrt{x} + \frac{1}{\sqrt{x}}$

(iv) $f(x) = x^2 + \frac{1}{x}$

MAXIMA & MINIMA

Q.16 Find out minimum/maximum value of $y = 1 - x^2$ also find out those points where value is minimum/maximum.

Q.17 Find out minimum/maximum value of $y = 2x^3 - 15x^2 + 36x + 11$ also find out those points where value is minimum/maximum.

Q.18 Determine the position where potential energy will be minimum if $U(x) = 100 - 50x + 1000x^2$ J.

Q.19 Find out minimum/maximum value of $y = 4x - x^2 + 6$ also find out those points where value is minimum/maximum.

INTEGRATION OF ELEMENTARY FUNCTIONS

Q.20 Find integrals of given functions

(i) (a) $2x$ (b) x^2 (c) $x^2 - 2x + 1$

(ii) (a) $\frac{1}{x^2}$ (b) $\frac{5}{x^2}$ (c) $2 - \frac{5}{x^2}$

(iii) (a) $\frac{3}{2}\sqrt{x}$ (b) $\frac{3}{2\sqrt{x}}$ (c) $\sqrt{x} + \frac{1}{\sqrt{x}}$

(iv) (a) $\frac{4}{3}\sqrt[3]{x}$ (b) $\frac{1}{3\sqrt[3]{x}}$ (c) $\sqrt[3]{x} + \frac{1}{\sqrt[3]{x}}$

(v) $(1 - x^2 - 3x^5)$ (vi) $\frac{4}{9}x^3 + \frac{7}{x^2} + x$

(vii) $x^8 + 9$ (viii) x^{-7} , (ix) $\frac{1}{3x}$

(x) $\int \left(\frac{1}{5} - \frac{2}{x^3} + 2x \right) dx$ (xi) $\int x^{-3}(x+1) dx$

(xii) $\int \left(y^2 + \frac{1}{2y} - y^3 + 3 \right) dy$

Q.21 Find integrals of given functions

(i) $3 \sin x$

(ii) $\int (\sin t - \cot t + t^3 + 3t^2 + 4) dt$

(iii) $\int \left(\sin x + \frac{2}{x^3} - 5x^4 + e^{-2x} + 3 \right) dx$

(iv) $\int \sin 3x dx$ (v) $\int 7 \sin \frac{\theta}{3} d\theta$

(vi) $\int 3 \cos 5\theta d\theta$

Q.22 Definite integration

(i) $\int_{-2}^1 5dx$

(ii) $\int_{-4}^1 \frac{\pi}{2} d\theta$

(iii) $\int_{-2}^4 \left(\frac{x}{2} + 3 \right) dx$

(iv) $\int_0^{2\pi} \sin \theta d\theta$

(v) $\int_0^1 e^x dx$

(vi) $\int_{\pi}^{2\pi} \theta d\theta$

(vii) $\int_0^{\sqrt[3]{7}} x^2 dx$

(viii) $\int_0^{\pi} \cos x dx$

(ix) Evaluate: $\int_0^1 \frac{1}{2x-3} dx$

CALCULATION OF AREA

Q.23 A particle is moving along x axis as $v = 2t + 3t^2 + 2$ here v is velocity and t is time in second then find average velocity when particle moves $t = 0$ to $t = 5$ second.

(1) 25 (2) 40 (3) 32 (4) 30

PHYSICS

- Q.24** Current is flowing in conductor as $i = 6t + 9t^2$ here t is time in second and i is current then find average current in conductor $t = 0$ to $t = 10$ sec.
(1) 50 A (2) 330 A (3) 200 A (4) 420 A

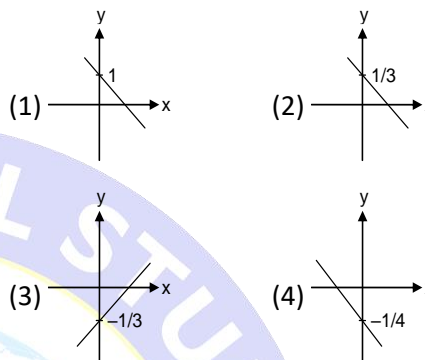
CO-ORDINATE GEOMETRY

- Q.25** Write an equation for (a) the vertical line and (b) the horizontal line passing through the given point.
(i) (2, 3) (ii) (0,0) (iii) (-4, 0) (iv) (0, b)
- Q.26** Write an equation for the line determined by the given point and slope.
(i) (1, 1), $m = 1$ (ii) (1, -1), $m = -1$
(iii) (-1, 1), $m = 1$ (iv) (-1, 1), $m = -1$
(v) (0, b), $m = 2$ (vi) (a, 0), $m = -2$
- Q.27** Write the equation of line :
(i) having slope 2 and passing through (1, 3)
(ii) having slope -1 and passing through (2, 1)
- Q.28** Find an equation for the line determined by the given points
(i) (1, 1), (2, 1) (ii) (1, 1), (1, 2)
(iii) (T, 0), (0, F₀) ($T \neq 0$, $F_0 \neq 0$)
(iv) (1, 2), (4, 3) (v) (-1, 4), (2, 6)
- Q.29** Write an equation for the line with the given slope and y-intercept.
(i) $m = -1$, $c = 2$ (ii) $m = 1$, $c = \sqrt{2}$
(iii) $m = -\frac{1}{2}$, $c = -3$
- Q.30** Find the slope and y-intercept of the line.
(i) $y = 3x + 5$ (ii) $x + y = 2$
(iii) $x - 2y = 4$ (iv) $4x - 3y = 12$
(v) $\frac{x}{3} + \frac{y}{4} = 1$ (vi) $\frac{x}{2} - \frac{y}{3} = -1$
- Q.31** Write the equation of line :
(i) having x intercept 3 and y intercept 2.
(ii) having x intercept -2 and y intercept 2.
- Q.32** Find the angle of inclination of the given line.
(i) $y = x + 2$ (ii) $x + \sqrt{3}y = 3$
(iii) $4x + 3y = 12$
- Q.33** Find the line through the given point with the given angle of inclination .
(i) (1, 4) $\phi = 60^\circ$ (ii) (-1, -1), $\phi = 135^\circ$
(iii) (-2, 3) $\phi = 90^\circ$ (iv) (3, -2) $\phi = 0^\circ$

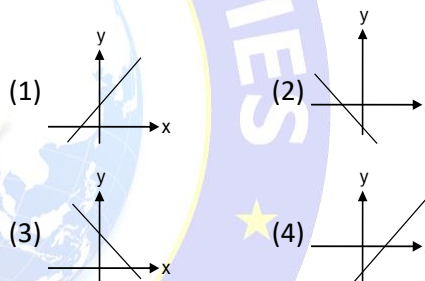
- Q.34** Find the center and radius of the circle and plot it.
(i) $x^2 + y^2 + 4x - 6y = 12$
(ii) $y^2 + x^2 = 4$
(iii) $(x - 3)^2 + (y - 2)^2 = 1$

GRAPHS

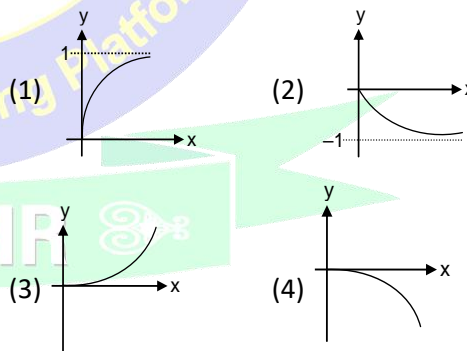
- Q.35** Correct graph of $3x + 4y + 1 = 0$ is :



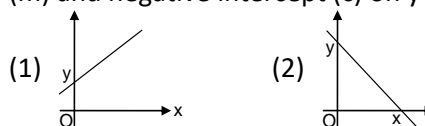
- Q.36** Graph of $y = 2x - 3$ is :

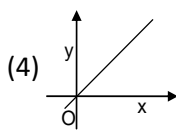
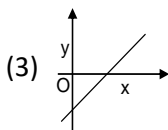


- Q.37** Graph of $y = 1 - e^{-x}$ is best represent by (for $x > 0$):

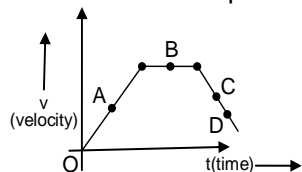


- Q.38** Which of the following graphs has positive slope (m) and negative intercept (c) on y-axis?





Q.39 The slope of $v - t$ is zero at point :



- (1) A (2) B (3) C (4) D

QUADRATIC EQUATION RATIO & PERCENTAGE

Q.40 Find root of given quadratic equations.

$$x^2 - 12x + 35 = 0$$

- (1) 7, 5 (2) 2, 3 (3) 4, 6 (4) 0, 1

Q.41 Find sum of roots and multiplication of root of given equations. $x^2 - 5x + 12 = 0$

- (1) 2, 12 (2) 5, 12 (3) 7, 12 (4) 4, 11

Q.42 A particle has momentum is p if its momentum increased by 20% then find % increase in kinetic energy.

- (1) 55% (2) 44% (3) 46% (4) 52%

Q.43 A charge particle moving perpendicular to magnetic field and force on particle is $F = qvB$ (here q is charge in coulomb and v is velocity in m/s and B is magnetic field in web.) if velocity of particle decrease 10% then find % change in force on charge particle.

- (1) 10% increase (2) 10% decrease
(3) 25% increase (4) 15% increase

Q.44 If $\frac{p}{q} = \frac{39}{17}$ then find

- (i) $\frac{p+q}{p-q}$ (ii) $\frac{p+q}{q}$ (iii) $\frac{p-q}{q}$

(1) (i) $\frac{28}{11}$ (ii) $\frac{56}{17}$ (iii) $\frac{22}{11}$

(2) (i) $\frac{7}{11}$ (ii) $\frac{5}{9}$ (iii) $\frac{3}{7}$

(3) (i) $\frac{7}{12}$ (ii) $\frac{3}{9}$ (iii) $\frac{12}{7}$

(4) (i) $\frac{5}{12}$ (ii) $\frac{4}{9}$ (iii) $\frac{7}{12}$

DEFINITION, TYPES OF VECTOR & ANGLE BETWEEN THE VECTORS

Q.45 Which one of the following statement is false

- (1) Mass, speed and energy are scalars
(2) Momentum, force and torque are vectors
(3) Distance is a scalar while displacement is a vector
(4) A vector has only magnitude where as a scalar has both magnitude and direction

Q.46 If \hat{n} is a unit vector in the direction of the vector \vec{A} , then :-

(1) $\hat{n} = \frac{\vec{A}}{|\vec{A}|}$ (2) $\hat{n} = \vec{A}|\vec{A}|$

(3) $\hat{n} = \frac{|\vec{A}|}{\vec{A}}$ (4) $\hat{n} = \hat{n} \times \vec{A}$

Q.47 Electro motive force (EMF) is :

- (1) scalar
(2) vector
(3) neither scalar nor vector
(4) none of these

Q.48 Which of the following physical quantities is an axial vector ?

- (1) displacement (2) force
(3) velocity (4) torque

Q.49 The forces, which meet at one point but their lines of action do not lie in one plane, are called:

- (1) non-coplanar and non-concurrent forces
(2) coplanar and non-concurrent forces
(3) non-coplanar and concurrent forces
(4) coplanar and concurrent forces

Q.50 A vector is not changed if

- (1) it is displaced parallel to itself
(2) it is rotated through an arbitrary angle
(3) it is cross-multiplied by a unit vector
(4) it is multiplied by an arbitrary scalar.

Q.51 The unit vector along $\hat{i} + \hat{j}$ is :

- (1) \hat{k} (2) $\hat{i} + \hat{j}$ (3) $\frac{\hat{i} + \hat{j}}{\sqrt{2}}$ (4) $\frac{\hat{i} + \hat{j}}{2}$

Q.52 If a unit vector is represented by

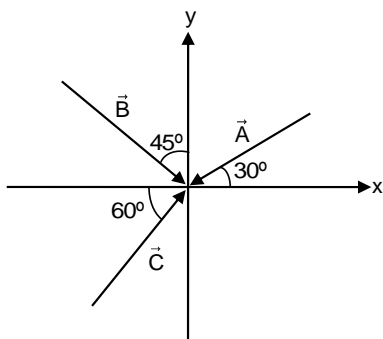
$$0.5\hat{i} - 0.8\hat{j} + c\hat{k},$$

then the value of 'c' is :

- (1) 1 (2) $\sqrt{0.11}$ (3) $\sqrt{0.01}$ (4) $\sqrt{0.39}$

Comprehension 53 to 55

Vectors \vec{A} , \vec{B} and \vec{C} are shown in figure. Find angle between



Q.53 \vec{A} and \vec{B}

- (1) 105° (2) 110° (3) 115° (4) 120°

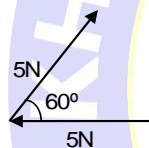
Q.54 \vec{A} and \vec{C}

- (1) 120° (2) 150° (3) 175° (4) 190°

Q.55 \vec{B} and \vec{C}

- (1) 90° (2) 120° (3) 105° (4) 150°

Q.56 The forces, each numerically equal to 5 N, are acting as shown in the Figure. Find the angle between forces?



- (1) 105° (2) 110° (3) 115° (4) 120°

Q.57 The vector joining the points A (1, 1, -1) and B (2, -3, 4) & pointing from A to B is -

- (1) $-\hat{i} + 4\hat{j} - 5\hat{k}$ (2) $\hat{i} + 4\hat{j} + 5\hat{k}$
(3) $\hat{i} - 4\hat{j} + 5\hat{k}$ (4) $-\hat{i} - 4\hat{j} - 5\hat{k}$

Q.58 If $\vec{A} = 3\hat{i} + 4\hat{j}$ then find \hat{A}

- (1) $\frac{3\hat{i} + 4\hat{j}}{5}$ (2) $\frac{3\hat{i} - 4\hat{j}}{5}$
(3) $\frac{4\hat{i} + 3\hat{j}}{5}$ (4) $\frac{4\hat{i} - 3\hat{j}}{5}$

ADDITION & SUBTRACTION OF VECTORS

Q.59 Given : $\vec{A} = 2\hat{i} + 3\hat{j}$ and $\vec{B} = 5\hat{i} - 6\hat{j}$. The magnitude of $\vec{A} + \vec{B}$ is

- (1) 4 units (2) 10 units
(3) $\sqrt{58}$ units (4) $\sqrt{32}$ units

Q.60 Given: $\vec{A} = 2\hat{i} - \hat{j} + 2\hat{k}$ and $\vec{B} = -\hat{i} - \hat{j} + \hat{k}$. The unit vector of $\vec{A} - \vec{B}$ is

- (1) $\frac{3\hat{i} + \hat{k}}{\sqrt{10}}$ (2) $\frac{3\hat{i}}{\sqrt{10}}$

(3) $\frac{\hat{k}}{\sqrt{10}}$

(4) $\frac{-3\hat{i} - \hat{k}}{\sqrt{10}}$

Q.61 Two vectors \vec{A} and \vec{B} lie in a plane, another vector \vec{C} lies outside this plane, then the resultant of these three vectors i.e. $\vec{A} + \vec{B} + \vec{C}$:

- (1) Can be zero
(2) Cannot be zero
(3) Lies in the plane containing \vec{A} & \vec{B}
(4) Lies in the plane containing \vec{B} & \vec{C}

Q.62 Given that $\vec{P} + \vec{Q} = \vec{P} - \vec{Q}$. This can be true when:

- (1) $\vec{P} = \vec{Q}$
(2) $\vec{Q} = \vec{0}$
(3) Neither \vec{P} nor \vec{Q} is a null vector
(4) \vec{P} is perpendicular to \vec{Q}

Q.63 The resultant of \vec{A} and \vec{B} makes an angle α with \vec{A} and β with \vec{B} , then :

- (1) $\alpha < \beta$ (2) $\alpha < \beta$ if $A < B$
(3) $\alpha < \beta$ if $A > B$ (4) $\alpha < \beta$ if $A = B$

Q.64 The minimum number of vectors of equal magnitude required to produce a zero resultant is :

- (1) 2 (2) 3
(3) 4 (4) more than 4

Q.65 How many minimum number of coplanar vectors having different magnitudes can be added to give zero resultant:-

- (1) 2 (2) 3 (3) 4 (4) 5

Q.66 How many minimum number of vectors in different planes can be added to give zero resultant:-

- (1) 2 (2) 3 (3) 4 (4) 5

Q.67 The vector sum of the forces of 10 newton and 6 newton can be :

- (1) 2 N (2) 8 N (3) 18 N (4) 20 N

Q.68 Vector sum of two forces of 10N and 6N cannot be :

- (1) 4 N (2) 8 N (3) 12 N (4) 2 N

Q.69 Which of the following pair of forces will never give resultant force of 2 N :

- (1) 2 N and 2 N (2) 1 N and 1 N
(3) 1 N and 3 N (4) 1 N and 4 N

Q.70 If $\vec{A} + \vec{B}$ is a unit vector along x-axis and $\vec{A} = \hat{i} - \hat{j} + \hat{k}$, then what is \vec{B} ?

- (1) $\hat{j} + \hat{k}$ (2) $\hat{j} - \hat{k}$
 (3) $\hat{i} + \hat{j} + \hat{k}$ (4) $\hat{i} + \hat{j} - \hat{k}$

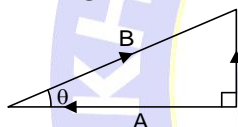
Q.71 Force 3 N, 4 N and 12 N act at a point in mutually perpendicular directions. The magnitude of the resultant force is :

- (1) 19 N (2) 13 N (3) 11 N (4) 5 N

Q.72 If vectors \vec{P} , \vec{Q} and \vec{R} have magnitudes 5, 12 and 13 units and $\vec{P} + \vec{Q} = \vec{R}$, the angle between \vec{Q} and \vec{R} is :

- (1) $\cos^{-1}\left(\frac{5}{12}\right)$ (2) $\cos^{-1}\left(\frac{5}{13}\right)$
 (3) $\cos^{-1}\left(\frac{12}{13}\right)$ (4) $\cos^{-1}\left(\frac{2}{13}\right)$

Q.73 In vector diagram shown in figure where (\vec{R}) is the resultant of vectors (\vec{A}) and (\vec{B}). If $R = \frac{B}{\sqrt{2}}$, the value of angle θ is :



- (1) 30° (2) 45° (3) 60° (4) 75°

Q.74 Two vectors \vec{A} and \vec{B} are such that $\vec{A} + \vec{B} = \vec{C}$ and $A^2 + B^2 = C^2$. Which of the following statements, is correct: -

- (1) \vec{A} is parallel to \vec{B}
 (2) \vec{A} is anti-parallel to \vec{B}
 (3) \vec{A} is perpendicular to \vec{B}
 (4) \vec{A} and \vec{B} are equal in magnitude

Q.75 The resultant of \vec{A} and \vec{B} is perpendicular to \vec{A} . What is the angle between \vec{A} and \vec{B} ?

- (1) $\cos^{-1}\left(\frac{A}{B}\right)$ (2) $\cos^{-1}\left(-\frac{A}{B}\right)$
 (3) $\sin^{-1}\left(\frac{A}{B}\right)$ (4) $\sin^{-1}\left(-\frac{A}{B}\right)$

Q.76 When two vector \vec{a} and \vec{b} are added, the magnitude of the resultant vector is always

- (1) greater than $(a + b)$
 (2) less than or equal to $(a + b)$
 (3) less than $(a + b)$
 (4) equal to $(a + b)$

Q.77 Six forces, 9.81 N each, acting at a point are coplanar. If the angles between neighboring forces are equal, then the resultant is

- (1) 0 N (2) 9.81 N
 (3) 2 (9.81) N (4) 3 (9.81) N.

Q.78 Rain is falling vertically downwards with a speed 5 m/s. If unit vector along upward is defined as \hat{j} , represent velocity of rain in vector form.

- (1) $5\hat{j}$ (2) $-5\hat{j}$ (3) $8\hat{j}$ (4) $-8\hat{j}$

Q.79 Two force and are acting at right angles to each other, find their resultant ?

- (1) $\sqrt{F_1^2 - F_2^2}$ (2) $\sqrt{F_1^2 + F_2^2}$
 (3) $\sqrt{F_1^3 - F_2^3}$ (4) $\sqrt{F_1^3 + F_2^3}$

Q.80 Two force of $\vec{F}_1 = 500$ N due east and $\vec{F}_2 = 250$ N due north, Find $\vec{F}_2 - \vec{F}_1$?

- (1) $250\sqrt{5}$ N, $\tan^{-1}(2)$ W of N
 (2) $250\sqrt{5}$ N, $\tan^{-1}(2)$ N of W
 (3) 250 N, $\tan^{-1}(2)$ W of S
 (4) 250 N, $\tan^{-1}(2)$ S of W

Q.81 Two vectors \vec{a} and \vec{b} inclined at an angle θ w.r.t. each other have a resultant \vec{c} which makes an angle β with \vec{a} . If the directions of \vec{a} and \vec{b} are interchanged, then the resultant will have the same

- (1) magnitude
 (2) direction
 (3) magnitude as well as direction
 (4) neither magnitude nor direction.

Q.82 A set of vectors taken in a given order gives a closed polygon. Then the resultant of these vectors is a

- (1) scalar quantity (2) pseudo vector
 (3) unit vector (4) null vector

Q.83 The vector sum of two force P and Q is minimum when the angle θ between their positive directions, is

- (1) $\frac{\pi}{4}$ (2) $\frac{\pi}{3}$ (3) $\frac{\pi}{2}$ (4) π .

Q.84 The vector sum of two vectors \vec{A} and \vec{B} is maximum, then the angle θ between two vectors is -

- (1) 0° (2) 30° (3) 45° (4) 60°

Q.85 Given : $\vec{C} = \vec{A} + \vec{B}$. Also, the magnitude of \vec{A} , \vec{B} and \vec{C} are 12, 5 and 13 units respectively. The angle between \vec{A} and \vec{B} is

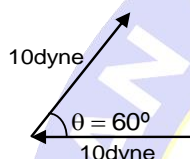
PHYSICS

- (1) 0° (2) $\frac{\pi}{4}$ (3) $\frac{\pi}{2}$ (4) π .

Q.86 The sum and difference of two perpendicular vectors of equal lengths are

- (1) of equal lengths and have an acute angle between them
- (2) of equal length and have an obtuse angle between them
- (3) also perpendicular to each other and are of different lengths
- (4) also perpendicular to each other and are of equal lengths.

Q.87 Two forces, each numerically equal to 10 dyne are acting as shown in the following figure. Their resultant is :



- (1) 10 dyne (2) 20 dyne
(3) $10\sqrt{3}$ dyne (4) 5 dyne

Q.88 What is the angle between \vec{A} and the resultant of $(\vec{A} + \vec{B})$ and $(\vec{A} - \vec{B})$?

- (1) 0° (2) $\tan^{-1}\left(\frac{A}{B}\right)$
(3) $\tan^{-1}\left(\frac{B}{A}\right)$ (4) $\tan^{-1}\left(\frac{A-B}{A+B}\right)$

DOT PRODUCT & CROSSPRODUCT

Q.89 The angle that the vector $\vec{A} = 2\hat{i} + 3\hat{j}$ makes with y-axis is :

- (1) $\tan^{-1}(3/2)$ (2) $\tan^{-1}(2/3)$
(3) $\sin^{-1}(2/3)$ (4) $\cos^{-1}(3/2)$

Q.90 A vector perpendicular to $(4\hat{i} - 3\hat{j})$ may be :

- (1) $4\hat{i} + 3\hat{j}$ (2) $7\hat{k}$
(3) $6\hat{i}$ (4) $3\hat{i} - 4\hat{j}$

Q.91 The vector $\vec{B} = 5\hat{i} + 2\hat{j} - 3\hat{k}$ is perpendicular to the vector $\vec{A} = 3\hat{i} + \hat{j} + 2\hat{k}$ if $S =$

- (1) 1 (2) 4.7
(3) 6.3 (4) 8.5

Q.92 The angle between two vectors given by $(6\hat{i} + 6\hat{j} - 3\hat{k})$ and $(7\hat{i} + 4\hat{j} + 4\hat{k})$ is :

- (1) $\cos^{-1}\left(\frac{1}{2}\right)$ (2) $\cos^{-1}\left(\frac{1}{3}\right)$
(3) $\cos^{-1}\left(\frac{1}{\sqrt{3}}\right)$ (4) $\cos^{-1}\left(\frac{2}{3}\right)$

Q.93 If $\vec{A} + \vec{B} = \vec{C}$ and $A + B = C$, then the angle between \vec{A} and \vec{B} is :

- (1) 0 (2) $\pi/4$
(3) $\pi/2$ (4) π

Q.94 The angle between the two vectors $\vec{A} = 3\hat{i} + 4\hat{j} + 5\hat{k}$ and $\vec{B} = 3\hat{i} + 4\hat{j} - 5\hat{k}$ will be :

- (1) zero (2) 180°
(3) 90° (4) 45°

Q.95 If $\vec{P} \cdot \vec{Q} = PQ$, then angle between \vec{P} and \vec{Q} is :

- (1) 0° (2) 30°
(3) 45° (4) 60°

Q.96 The magnitudes of vectors \vec{A} , \vec{B} and \vec{C} are respectively 12, 5 and 13 units and $\vec{A} + \vec{B} = \vec{C}$, then the angle between \vec{A} and \vec{B} is :

- (1) 0 (2) 45°
(3) $\pi/2$ (4) π

Q.97 Area of a parallelogram, whose diagonals are $3\hat{i} + \hat{j} - 2\hat{k}$ and $\hat{i} - 3\hat{j} + 4\hat{k}$ will be :

- (1) $\sqrt{95}$ (2) $\sqrt{99}$
(3) $\sqrt{105}$ (4) $\sqrt{100}$

Q.98 A vector \vec{A} points vertically downward & \vec{B} points towards east, then the vector product $\vec{A} \times \vec{B}$ is

- (1) along west (2) along east
(3) zero (4) along south

Q.99 If \hat{i} , \hat{j} and \hat{k} are unit vectors along X, Y & Z axis respectively, then tick the wrong statement:

- (1) $\hat{i} \cdot \hat{i} = 1$ (2) $\hat{i} \times \hat{j} = \hat{k}$
(3) $\hat{i} \cdot \hat{j} = 0$ (4) $\hat{i} \times \hat{k} = -\hat{j}$

Q.100 Two vectors \vec{P} and \vec{Q} are inclined to each other at angle θ . Which of the following is the unit vector perpendicular to \vec{P} and \vec{Q} ?

- (1) $\frac{\vec{P} \times \vec{Q}}{\vec{P} \cdot \vec{Q}}$ (2) $\frac{\hat{P} \times \hat{Q}}{\sin \theta}$
(3) $\frac{\hat{P} \times \hat{Q}}{PQ \sin \theta}$ (4) $\frac{\hat{P} \times \vec{Q}}{PQ \sin \theta}$

Q.101 The magnitude of the vector product of two vectors \vec{A} and \vec{B} may not be :

- (1) Greater than AB (2) Less than AB
(3) Equal to AB (4) Equal to zero

Q.102 If $\vec{P} \times \vec{Q} = \vec{R}$, then which of the following statements is not true :

- (1) $\vec{R} \perp \vec{P}$ (2) $\vec{R} \perp \vec{Q}$
(3) $\vec{R} \perp (\vec{P} + \vec{Q})$ (4) $\vec{R} \perp (\vec{P} \times \vec{Q})$

Q.103 Which of the following vector identities is false?

- (1) $\vec{P} + \vec{Q} = \vec{Q} + \vec{P}$ (2) $\vec{P} + \vec{Q} = \vec{Q} \times \vec{P}$
(3) $\vec{P} \cdot \vec{Q} = \vec{Q} \cdot \vec{P}$ (4) $\vec{P} \times \vec{Q} \neq \vec{Q} \times \vec{P}$

Q.104 If the vectors $(\hat{i} + \hat{j} + \hat{k})$ and $3\hat{i}$ form two sides of a triangle, then area of the triangle is :

- (1) $\sqrt{3}$ unit (2) $2\sqrt{3}$ unit
(3) $\frac{3}{\sqrt{2}}$ unit (4) $3\sqrt{2}$ unit

Q.105 What is the value of $(\vec{A} + \vec{B}) \cdot (\vec{A} \times \vec{B})$?

- (1) 0 (2) $A^2 - B^2$
(3) $A^2 + B^2 + 2AB$ (4) none of these

Q.106 If $\vec{A} \times \vec{B} = \vec{0}$ and $\vec{B} \times \vec{C} = \vec{0}$, then the angle between \vec{A} and \vec{C} may be :

- (1) zero (2) $\frac{\pi}{4}$
(3) $\frac{\pi}{2}$ (4) none of these

Q.107 Find the magnitude of $3\hat{i} + 2\hat{j} + \hat{k}$?

- (1) $\sqrt{14}$ (2) $\sqrt{13}$ (3) $\sqrt{12}$ (4) $\sqrt{10}$

Q.108 Three non zero vectors \vec{A} , \vec{B} & \vec{C} satisfy the relation $\vec{A} \cdot \vec{B} = 0$ & $\vec{A} \cdot \vec{C} = 0$. Then \vec{A} can be parallel to :

- (1) \vec{B} (2) \vec{C} (3) $\vec{B} \cdot \vec{C}$ (4) $\vec{B} \times \vec{C}$

Q.109 If $\hat{n} = a\hat{i} + b\hat{j}$ is perpendicular to the vector, $(\hat{i} - \hat{j})$, then the value of a and b may be :

- (1) 1, 0 (2) -2, 0
(3) 3, 0 (4) $\frac{1}{\sqrt{2}}, \frac{1}{\sqrt{2}}$

Q.110 For a body, angular velocity $(\vec{\omega}) = \hat{i} - 2\hat{j} + 3\hat{k}$ and radius vector $(\vec{r}) = \hat{i} + \hat{j} + \hat{k}$, then its velocity is:

- (1) $-5\hat{i} + 2\hat{j} + 3\hat{k}$ (2) $-5\hat{i} + 2\hat{j} - 3\hat{k}$
(3) $-5\hat{i} - 2\hat{j} + 3\hat{k}$ (4) $-5\hat{i} - 2\hat{j} - 3\hat{k}$

RESOLUTION OF VECTOR, PROJECTION OF VECTOR, MISC

Q.111 What is the projection of \vec{A} on \vec{B} ?

- (1) $\vec{A} \cdot \vec{B}$ (2) $\vec{A} \cdot \hat{B}$
(3) $\vec{B} \cdot \vec{A}$ (4) $\hat{A} \cdot \hat{B}$

Q.112 What is the maximum number of components into which a vector can be split?

- (1) 2 (2) 3
(3) 4 (4) ∞

Q.113 What is the maximum number of rectangular components into which a vector can be split in its own plane?

- (1) 2 (2) 3 (3) 4 (4) ∞

Q.114 What is the maximum number of rectangular components into which a vector can be split in space?

- (1) 2 (2) 3 (3) 4 (4) ∞

Q.115 Vector makes angle α , β and γ with the X, Y and Z axes respectively.

Then $\sin^2 \alpha + \sin^2 \beta + \sin^2 \gamma =$

- (1) 0 (2) 1 (3) 2 (4) 3

Q.116 The direction cosines of a vector $\hat{i} + \hat{j} + \sqrt{2}\hat{k}$ are:

- (1) $\frac{1}{2}, \frac{1}{2}, 1$ (2) $\frac{1}{\sqrt{2}}, \frac{1}{\sqrt{2}}, \frac{1}{\sqrt{2}}$
(3) $\frac{1}{2}, \frac{1}{2}, \frac{1}{\sqrt{2}}$ (4) None of these

Q.117 What is the x component of a 25 m displacement at an angle of 210° with the x-axis (anti clockwise)?

- (1) $25 \cos 30^\circ$ (2) $25 \sin 30^\circ$
(3) $-25 \cos 30^\circ$ (4) $-25 \sin 30^\circ$

Q.118 One of the rectangular components of a velocity of 60 km h^{-1} is 30 km h^{-1} . Find other rectangular component?

- (1) $20\sqrt{3} \text{ km h}^{-1}$ (2) $30\sqrt{2} \text{ km h}^{-1}$
(3) $20\sqrt{2} \text{ km h}^{-1}$ (4) $30\sqrt{3} \text{ km h}^{-1}$

ANSWER KEY

TOPIC WISE QUESTIONS

Q.1 Change radian to degree

- (i) 45° (ii) 150° (iii) 630° (iv) 108°
 (v) 120° (vi) 135°

Q.2 Change degree to radian

- (i) $8\pi/9$ (ii) $3\pi/4$ (iii) $5\pi/12$ (iv) $13\pi/36$
 (v) $5\pi/4$ (vi) $25\pi/18$ (vii) $31\pi/18$

Q.3 (i) $\frac{\sqrt{3}-1}{2\sqrt{2}}$ (ii) $\frac{\sqrt{3}+1}{2\sqrt{2}}$ (iii) $\frac{\sqrt{3}-1}{\sqrt{3}+1}$

(iv) $\frac{3}{4}$

(v) $\frac{3}{5}$ (vi) $\frac{3}{4}$ (vii) $\frac{4}{3}$ (viii) Zero

Q.4 (i) $-\sqrt{2}$ (ii) -1 (iii) $\frac{\sqrt{3}+1}{2\sqrt{2}}$
 (iv) $-\frac{\sqrt{3}}{2}$

(v) $-\frac{1}{2}$ (vi) 1 (vii) $-\frac{1}{\sqrt{2}}$ (viii) $-\frac{1}{\sqrt{2}}$

(ix) 0

Q.5 (i) $\frac{1}{2}$ (ii) $\frac{1}{2\sqrt{2}}$ (iii) $\frac{\sqrt{3}+1}{\sqrt{3}-1}$ (iv) $\frac{\sqrt{2}-1}{2\sqrt{2}}$

Q.6 (i) $\frac{1}{\sqrt{2}}$ (ii) $\frac{1}{\sqrt{3}}$ (iii) $-\frac{1}{\sqrt{2}}$ (iv) $\frac{\sqrt{3}}{2}$

Q.7 (i) $\pm \frac{5}{13}$ (ii) $\frac{\pi}{6}, \frac{5\pi}{6}$ (iii) $\frac{15}{17}$ (iv) 25

APPROXIMATION

Q.8 (2)

Q.9 (1)

Q.10 (3)

DIFFERENTIATION

Q.11 (i) $3x^2$

(ii) $\frac{-2}{x^3}$

(iii) $\frac{dy}{dx} = 2x + 1$

(iv) $2 \sec^2 x$

(v) $\frac{dy}{dx} = 5 \cos x$

(vi) $\frac{dy}{dx} = 2x + \cos x$

(vii) $\sec^2 x - \operatorname{cosec}^2 x$

(viii) $\frac{dy}{dx} = e^x \cdot \sin x + e^x \cos x$

(xi) $\sin x + x \cos x$

(x) $e^x \ln x + \frac{e^x}{x}$

(xi) $e^x (\tan x + \sec^2 x)$

(xii) $\frac{dy}{dx} = (2x+3)(2x^4-5) + (x^2+3x-2)(8x^3)$

(xiii) $\cos^2 x - \sin^2 x$

(xiv) $\frac{ds}{dt} = (t^2+1)(2t) + (t^2-1)2t = 4t^3$

Q.12 (i) $\sec^2 x$

(ii) $1 - \frac{1}{x^2}$

(iii) $\frac{x^2(\cos x) - \sin x(2x)}{x^4}$

(iv) $\frac{dy}{dx} = \frac{(2x+1)2x - x^2 \times 2}{(2x+1)^2} \Rightarrow \frac{2x^2+2x}{(2x+1)^2}$

(v) $\frac{dy}{dx} = \frac{x(-\sin x) - \cos x}{x^2}$

(vi) $2 \cos 2x$

(vii) $\sin 2x$

(viii) $5 \cos 5x$

(ix) $2a \cos(ax+b)$

(x) $10(2x+1)^4$

(xi) $-27(4-3x)^8$

(xii) $y = -4 \sin(6-8x)$ (xiii) $\frac{4x}{\sqrt{4x^2+2}}$

(xiv) $\frac{1}{\sqrt{2x+5}}$

(xv) $y = \frac{-(6x+1)}{(6x^2+2x+3)^{3/2}}$

(xvi) $-\frac{7}{2(7x-2)^{3/2}}$

(xvii) $\frac{1}{2\sqrt{2x-4}}$

(xviii) $\frac{dy}{dx} = \frac{1}{\sqrt{16-(x-6)^2}}$

(xix) $\frac{e^{\frac{x-6}{4}}}{4}$

Q.13 Find out first derivative & second derivative

(i) $\cos x, -\sin x$

(ii) $4\theta, 4$

(iii) $\frac{1}{x}, -\frac{1}{x^2}$

(iv) $12x - 10 + 10x^{-3}, 12 - 30x^{-4}$

(v) $-\frac{12}{\theta^2} + \frac{12}{\theta^4} - \frac{4}{\theta^5}; \frac{24}{\theta^3} - \frac{48}{\theta^5} + \frac{20}{\theta^6}$

(vi) $\cos x - \sin x; -\sin x - \cos x$

(vii) $\frac{1}{x} + e^x, -\frac{1}{x^2} + e^x$

Q.14 (i) -4 (ii) 2 (iii) 0 (iv) $\frac{1}{16}$

Q.15 (i) -34 (ii) -1 (iii) $\frac{1}{3\sqrt{3}}$ (iv) -3

MAXIMA & MINIMA

Q.16 Max. value = 1 at $x = 0$

Q.17 Max. value = 39 at $x = 2$, Min. value = 38 at $x = 3$

Q.18 The minimum occurs at $x = 0.25 \times 10^{-1}$

Q.19 Max. value = 10 at $x = 2$

INTEGRATION

Q.20 (i) (a) $x^2 + c$ (b) $\frac{x^3}{3} + c$ (ix) $\frac{1}{3} \ln x + c$ (x) $\frac{x}{5} + \frac{1}{x^2} + x^2 + c$

(c) $\frac{x^3}{3} - x^2 + x + c$

(xi) $-\frac{1}{x} - \frac{1}{2x^2} + c$

(ii) (a) $-\frac{1}{x} + c$ (b) $-\frac{5}{2x^2} + c$

(xii) $\frac{y^2}{3} + \frac{1}{2} \log_e y - \frac{y^4}{4} + 3y + c$

(c) $2x + \frac{5}{x} + c$

Q.21 (i) $-3 \cos x + c$

(iii) (a) $\sqrt{x^3} + c$ (b) $3\sqrt{x} + c$

(ii) $-\cos t - \sin t + \frac{t^4}{4} + t^3 + 4t + c$

(c) $\frac{2\sqrt{x^3}}{3} + 2\sqrt{x} + c$

(iii) $-\cos x - \frac{1}{x^2} - x^5 - \frac{e^{-2x}}{2} + 3x + c$

(iv) (a) $x^{4/3} + c$ (b) $\frac{x^{2/3}}{2} + c$

(iv) $-\frac{\cos 3x}{3} + c$

(c) $\frac{3x^{4/3}}{4} + \frac{3x^{2/3}}{2} + c$

(v) $-21 \cos \frac{\theta}{3} + c$ (vi) $\frac{3}{5} \sin 5\theta + c$

(v) $x - \frac{x^3}{3} - \frac{x^6}{2} + c$ (vi) $\frac{x^4}{9} - \frac{7}{x} + \frac{x^2}{2} + c$

Q.22 (i) 15 (ii) $\frac{3\pi}{2}$ (iii) 21 (iv) 0

(vii) $\frac{x^9}{9} + 9x + c$ (viii) $\frac{x^{-6}}{-6} + c$

(v) $e - 1$ (vi) $\frac{3\pi^2}{2}$ (vii) $\frac{7}{3}$ (viii) 0

(ix) $-\frac{1}{2} \log 3$

CALCULATION OF AREA

Q.23 (3) 32

Q.24 (2) 330 A

COORDINATE GEOMETRY

Q.25 (i) (a) $x = 2$, (b) $y = 3$ (ii) (a) $x = 0$, (b) $y = 0$
(iii) (a) $x = -4$, (b) $y = 0$ (iv) (a) $x = 0$, (b) $y = b$

(iii) $y = (-F_0/T)x + F_0$ (iv) $3y = x + 5$

(v) $3y = 2x + 14$

Q.26 (i) $y = x$ (ii) $y + x = 0$
(iii) $y = x + 2$ (iv) $y + x = 0$
(v) $y = 2x + b$ (vi) $y + 2x = 2a$

Q.29 (i) $y + x = 2$ (ii) $y = x + \sqrt{2}$
(iii) $y = -3$

Q.27 (i) $y = 2x + 1$ (ii) $x + y = 3$

Q.30 (i) $m = 3$, $c = 5$ (ii) $m = -1$, $c = 2$

(iii) $m = \frac{1}{2}$, $c = -2$ (iv) $m = \frac{4}{3}$, $c = -4$

Q.28 (i) $y = 1$ (ii) $x = 1$

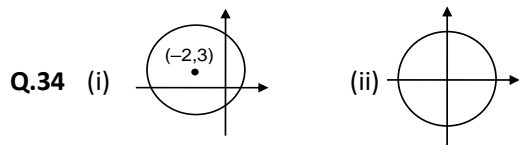
PHYSICS

(v) $m = -\frac{4}{3}$, $c = 4$ (vi) $m = \frac{3}{2}$, $c = 3$

Q.31 (i) $2x + 3y = 6$ (ii) $y = x + 2$

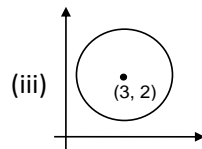
Q.32 (i) 45° (ii) 150° (iii) 127°

Q.33 (i) $y = \sqrt{3}x + (4 - \sqrt{3})$ (ii) $y + x + 2 = 0$
(iii) $x = -2$ (iv) $y = -2$



Center $C(-2, 3)$,
Radius $r = 5$

Center $C(0, 0)$,
Radius $r = 2$



Center $C(3, 2)$, Radius $r = 1$

Que.	35	36	37	38	39	40	41	42	43	44	45	46	47	48	49
Ans.	4	4	1	3	2	1	2	2	2	1	4	1	1	4	3
Que.	50	51	52	53	54	55	56	57	58	59	60	61	62	63	64
Ans.	1	3	2	1	2	3	4	3	1	3	1	2	2	3	1
Que.	65	66	67	68	69	70	71	72	73	74	75	76	77	78	79
Ans.	2	3	2	4	4	2	2	3	2	3	2	2	1	2	2
Que.	80	81	82	83	84	85	86	87	88	89	90	91	92	93	94
Ans.	1	1	4	4	1	3	4	1	1	2	4	4	4	1	3
Que.	95	96	97	98	99	100	101	102	103	104	105	106	107	108	109
Ans.	1	3	2	4	4	2	1	4	2	3	1	1	1	4	4
Que.	110	111	112	113	114	115	116	117	118						
Ans.	1	2	4	1	2	3	3	3	4						

Most Trusted Learning Platform



KHAN SIR

